

Monday 10 June 2013 – Afternoon

**GCSE GATEWAY SCIENCE
SCIENCE B**

B711/02 Science modules B1, C1, P1 (Higher Tier)

Candidates answer on the Question Paper.
A calculator may be used for this paper.

Duration: 1 hour 15 minutes

OCR supplied materials:
None

Other materials required:

- Pencil
- Ruler (cm/mm)



Candidate forename		Candidate surname	
-----------------------	--	----------------------	--

Centre number						Candidate number				
---------------	--	--	--	--	--	------------------	--	--	--	--

INSTRUCTIONS TO CANDIDATES

- Write your name, centre number and candidate number in the boxes above. Please write clearly and in capital letters.
- Use black ink. HB pencil may be used for graphs and diagrams only.
- Answer **all** the questions.
- Read each question carefully. Make sure you know what you have to do before starting your answer.
- Write your answer to each question in the space provided. Additional paper may be used if necessary but you must clearly show your candidate number, centre number and question number(s).
- Do **not** write in the bar codes.

INFORMATION FOR CANDIDATES

- Your quality of written communication is assessed in questions marked with a pencil (✎).
- A list of equations can be found on page 2.
- The Periodic Table can be found on the back page.
- The number of marks is given in brackets [] at the end of each question or part question.
- The total number of marks for this paper is **75**.
- This document consists of **28** pages. Any blank pages are indicated.

EQUATIONS

energy = mass × specific heat capacity × temperature change

energy = mass × specific latent heat

efficiency = $\frac{\text{useful energy output} (\times 100\%)}{\text{total energy input}}$

wave speed = frequency × wavelength

power = voltage × current

energy supplied = power × time

average speed = $\frac{\text{distance}}{\text{time}}$

distance = average speed × time

$$s = \frac{(u + v)}{2} \times t$$

acceleration = $\frac{\text{change in speed}}{\text{time taken}}$

force = mass × acceleration

weight = mass × gravitational field strength

work done = force × distance

power = $\frac{\text{work done}}{\text{time}}$

power = force × speed

$$\text{KE} = \frac{1}{2}mv^2$$

momentum = mass × velocity

force = $\frac{\text{change in momentum}}{\text{time}}$

GPE = mgh

$$mgh = \frac{1}{2}mv^2$$

resistance = $\frac{\text{voltage}}{\text{current}}$

BLANK PAGE


Question 1 begins on page 4

PLEASE DO NOT WRITE ON THIS PAGE

Answer **all** the questions.

SECTION A – Module B1

1 Look at the picture of a macaw.



(a) (i) There are 70 chromosomes in each **body** cell of a macaw.

Humans have 23 pairs of chromosomes in each body cell.

How many **pairs** of chromosomes are in a body cell of a macaw?

..... [1]

(ii) The macaw in the picture is male.

Sex is determined by sex chromosomes.

Write down the pair of sex chromosomes that are in each body cell of a **human male**.

..... [1]

(b) In humans, like many animals, equal numbers of males and females are produced.

Explain how equal numbers of male and female offspring are produced.

Use a genetic diagram.

.....

.....

..... [2]

(c) The natural environment for a macaw is the top of trees in tropical rainforests.

The position of the eyes on the head of a macaw makes it difficult for it to judge distance.

Explain why.

.....

.....

..... [2]

[Total: 6]

(c) Diabetes can affect the retina.

The retina is part of the eye.

Describe the job of the retina.

.....

.....

..... [2]

[Total: 9]

Question 3 begins on page 8

3 Look at the table.

It shows the number of cases and the number of deaths for four different types of cancer in the UK, in 2008.

Type of cancer	Number of cases		Number of deaths	
	Male	Female	Male	Female
colon	13 359	12 192	5 226	4 938
lung	22 846	17 960	19 863	15 393
stomach	4 923	2 687	3 186	1 992
thyroid	558	1 596	138	216

Use data from the table to answer the questions.

(a) (i) In this study, lung cancer is the most common cancer in both males and females.

The lifestyle of a person can greatly affect the chance of getting lung cancer.

What changes might someone make to their lifestyle to reduce the risk of lung cancer?

.....

.....

..... [2]

(ii) Calculate the ratio between cases and deaths for **thyroid** cancer in both males and females.

male cases to male deaths ratio

female cases to female deaths ratio

[2]

(iii) Use your answer from **part (ii)** to explain whether males or females are more at risk of dying from thyroid cancer.

..... [1]

(b) The treatment of cancer has been improved by the research of Sir Paul Nurse.

Read the article about his research.

Sir Paul Nurse is a scientist who investigated cell division in yeast.

In 1980, his research produced results that were unexpected. He found that, the increase in cell numbers was due to delayed cell death rather than more rapid cell division.

For some time, he thought his experiment was flawed. After repeating the experiment, he still got the same results.

Cancer researchers used these results to help them develop entirely new cancer treatments.

In 2001, Sir Paul Nurse received the Nobel Prize for his work.

Suggest reasons why this work has led to him receiving the Nobel Prize.

.....

.....

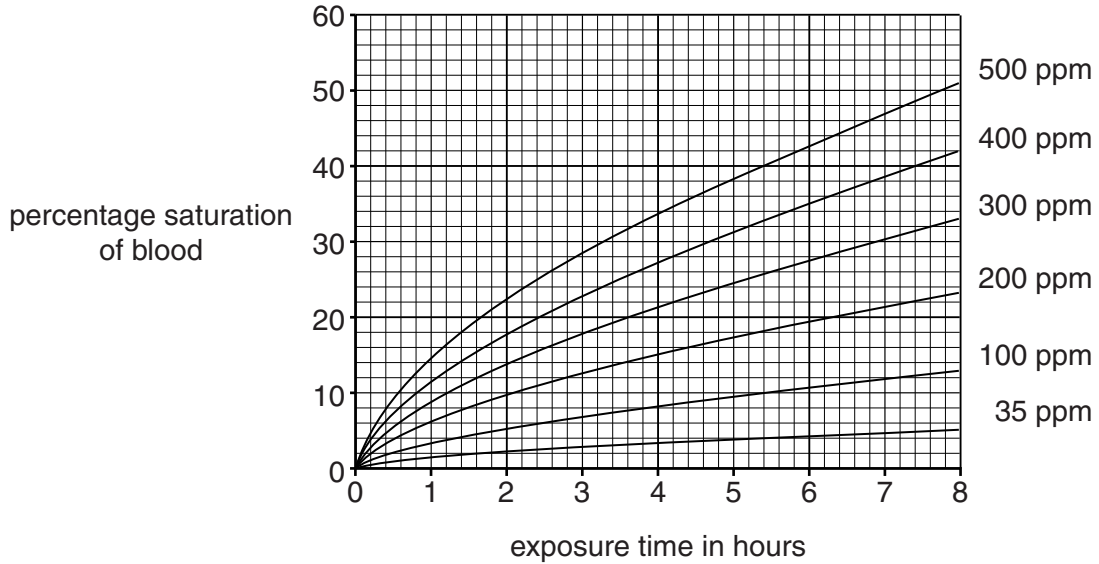
..... [2]

[Total: 7]

4 Carbon monoxide is a poisonous gas. It causes many deaths in the UK.

Look at the graph.

It shows the percentage saturation of blood during exposure to different levels of carbon monoxide (parts per million).



(a) A person becomes unconscious at 40 per cent saturation of blood.

How much longer will it take to become unconscious at a carbon monoxide concentration of 400 ppm compared to 500 ppm?

..... [1]

(b) An unconscious patient can be treated with oxygen.

The patient needs to breathe 100 per cent oxygen at high pressure.

Suggest how this treatment helps the body recover from carbon monoxide poisoning.

.....

 [2]

[Total: 3]

SECTION B – Module C1

5 Crude oil is a mixture of hydrocarbons.

Crude oil is separated into fractions in an oil refinery.

Look at the table. It shows information about some of the fractions.

Fraction	Number of carbon atoms per molecule	Boiling point in °C	Percentage in crude oil (the supply)	Percentage needed by the oil refinery (the demand)
Liquefied Petroleum Gases (LPG)	1 – 4	less than 30	4	11
Petrol	5 – 9	30 – 65	11	32
Naphtha	6 – 12	65 – 180	22	4
Paraffin	10 – 14	160 – 250	12	20
Diesel	13 – 20	250 – 340	18	15
Bitumen	Over 20	more than 340	23	4

(a) An alkane has the molecular formula $C_{11}H_{24}$.

Estimate the boiling point of this alkane.

..... [1]

(b) The petrol fraction has a lower boiling point than the diesel fraction.

Explain why.

.....

 [2]

(c) Cracking helps an oil refinery to match the **supply** of certain fractions with the **demand** for them.

Use information from the table to explain how.

.....

 [2]

[Total: 5]

Turn over

- 6 The air may contain different pollutants.

Look at the table.

It shows the relative concentration of pollutants found in the air in two places in the world.

Pollutant	Relative concentration in the air	
	in a city centre	near a volcano
carbon monoxide	0.3	0.01
hydrogen sulfide	0.01	210
oxides of nitrogen	1.5	0.1
sulfur dioxide	200	1500
trichlorofluoromethane	0.01	0.005

- (a) Some scientists think that volcanic eruptions cause acid rain.

What evidence is there in the table of data to support this idea?

.....

.....

.....

..... [2]

- (b) Nitrogen monoxide, NO, reacts with oxygen, O₂.

Nitrogen dioxide, NO₂, is made.

Write down the **balanced symbol** equation for this reaction.

..... [2]

[Total: 4]

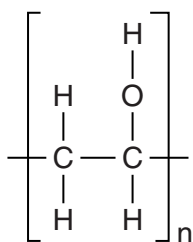
8 Chemists are developing new types of polymers that are:

- biodegradable
- soluble in water.

(a) Explain why chemists are developing these new types of polymers.

.....
 [1]

(b) Look at the displayed formula of a polymer that is soluble in water.



This polymer is **not** a hydrocarbon.

Explain why.

.....
 [1]

(c) These chemists publish their results using books, the internet and conferences.

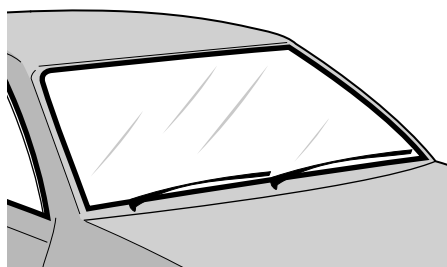
Why is it important that these chemists publish their results?

.....

 [2]

(d) Look at the table. It shows the properties of some polymers.

Polymer	Colour	Strength (1 = Weak, 10 = Strong)	Hardness (1 = Soft, 10 = Hard)	Biodegradable	Density (1 = Low, 10 = High)
A	white	10	10	yes	8
B	black	3	1	no	1
C	colourless	8	9	no	10
D	colourless	7	1	no	3
E	colourless	8	9	yes	1



Polymer **C** is used to make the windscreen of this car.

Explain why.

.....

.....

.....

..... [2]

[Total: 6]

9 Potato salad is a mixture of cooked potatoes and mayonnaise.

The mayonnaise contains an emulsifier to help stop oil and water from separating.

(a) Explain, using a labelled diagram, how an emulsifier helps to stop oil and water from separating.

.....
.....
.....
..... [2]

(b) Potato is easier to digest if it is cooked.

Explain why.

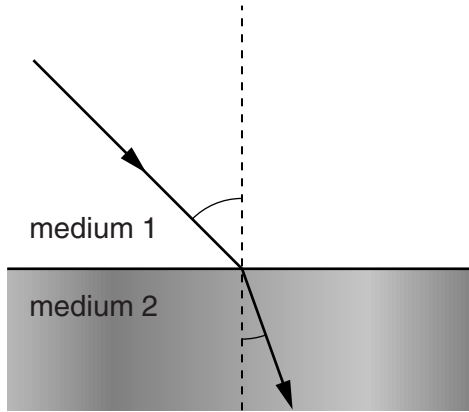
.....
.....
.....
..... [2]

[Total: 4]

SECTION C – Module P1

10 This question is about light.

(a) (i) The diagram shows light being refracted from medium 1 to medium 2.



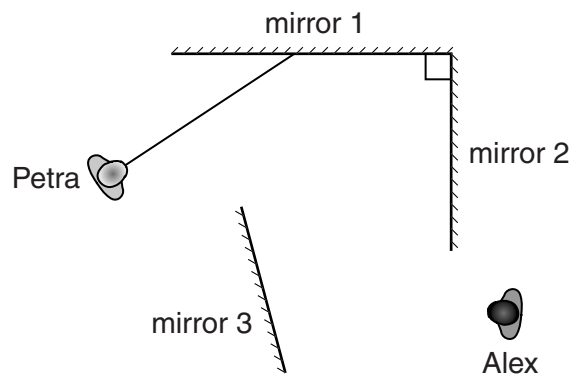
Why does **refraction** occur?

.....
 [1]

(ii) Alex and Petra are at a fairground.

They visit the Hall of Mirrors.


Complete the ray diagram to show how Alex and Petra can see each other.



[1]

(b) Light can be produced by lasers.

Look at the picture of a laser light show.



Laser light shows use lasers with intense coherent beams.

Explain what is meant by an **intense coherent** laser beam.

.....

.....

..... [2]

(c) Morse code can be used for communication.

Look at the table showing part of the Morse code.

A	·-	1	·- - - -
B	- · · ·	2	· · - - -
C	- · - ·	3	· · · - -
D	- · ·	4	· · · -
E	·	5	· · · · ·
F	· · - ·	6	- · · · ·

Morse code can be sent by light.

(i) In the past, coded light signals were used to send messages over **long** distances.

Explain how this was done.

.....

.....

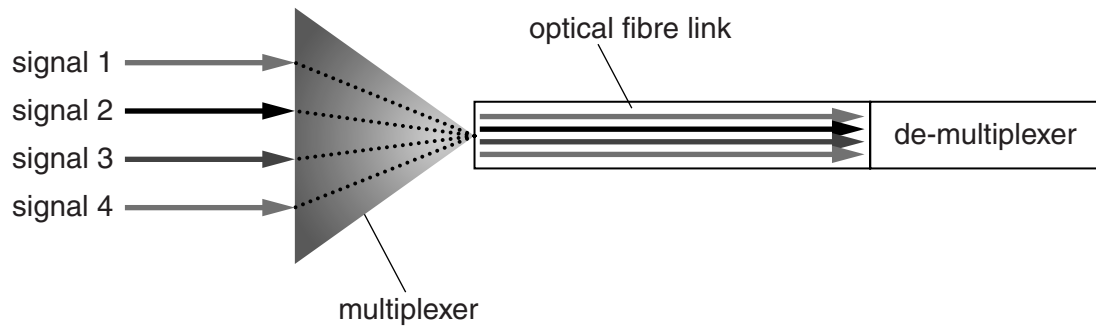
..... [2]

(ii) Coded signals can also be sent using electrical pulses.

Explain **one advantage** of using light signals rather than electrical pulses in modern cable communication systems.

.....
..... [1]

(d) Light signals can be transmitted using an optical fibre link.

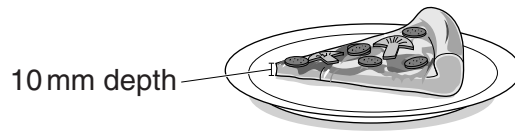


Describe the job of the **de-multiplexer**.

.....
..... [1]

[Total: 8]

11 Gino wants to heat a thin slice of pizza.

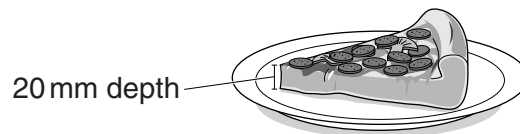


thin pizza slice

Look at the information about the two different methods of heating the **thin** pizza slice.

Method of heating	How a pizza slice is heated	Distance waves can penetrate into a pizza slice in mm	Time to heat the thin pizza slice in minutes
oven using infrared waves	heats the top surface of the pizza	<1	5
oven using microwaves	heats water and fat in the pizza	>7	1.5

Gino also wants to heat a thicker slice of pizza.



thick pizza slice

The **thick** pizza contains a greater percentage (%) of **water and fat**.

12 Kathy and Jonathan collect information about different electromagnetic waves.

Type of electromagnetic wave	Wave speed in m/s	Wavelength in m
microwave	3×10^8	2×10^{-2}
radio	3×10^8	2
X-ray	3×10^8	2×10^{-9}
infrared	3×10^8	2×10^{-5}

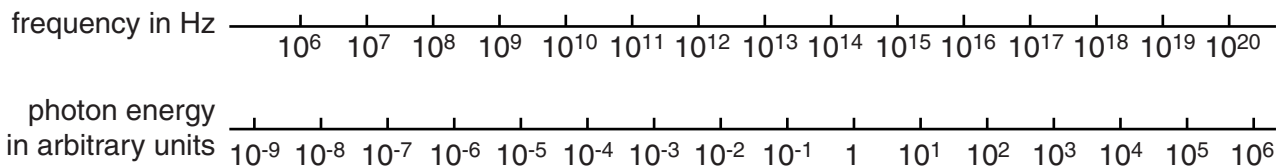
(a) Use the information in the table to calculate the **frequency** of the **microwave**.

.....

frequency = Hz [3]

(b) The energy of electromagnetic waves is carried by photons.

The chart shows information about frequency and photon energy.



(i) Use the chart to describe the relationship between frequency and energy.

.....
 [1]

(ii) Infrared waves can vary in wavelength.

Infrared radiation from source **A** has a wavelength of 1×10^{-5} m.

Infrared radiation from source **B** has a wavelength of 1×10^{-6} m.

Compare the energy **and** potential dangers to humans of the radiation emitted by sources **A** and **B**.

.....

 [2]

[Total: 6]

13 Some waves are potentially harmful to humans.

(a) (i) Noah's skin is naturally **darker** than Aiden's skin.



Noah



Aiden

Noah thinks this may reduce his skin cancer risk from ultraviolet waves.

Is he correct?

.....

Explain why.

.....
.....
..... [1]

(ii) Sunscreens can reduce the risk of sunburn.

A scientist collects evidence about a new sunscreen.

The scientist carries out four tests.

Test	Time taken for skin to burn in minutes	
	Without sunscreen	With the new sunscreen
A	30	70
B	40	90
C	10	15
D	20	50

The scientist **cannot** conclude that the sunscreen **more than** doubles the time you can safely stay in the sun.

Identify the conflicting evidence and suggest how the confidence of the conclusion could be increased.

.....

.....

.....

.....

..... [2]

(b) The ozone layer protects the Earth from ultraviolet radiation.

Environmental pollution from CFCs has depleted the ozone layer.

Explain why people are concerned about this.

.....

.....

.....

..... [2]

[Total: 5]

END OF QUESTION PAPER

BLANK PAGE

PLEASE DO NOT WRITE ON THIS PAGE

BLANK PAGE

PLEASE DO NOT WRITE ON THIS PAGE

PLEASE DO NOT WRITE ON THIS PAGE



Copyright Information

OCR is committed to seeking permission to reproduce all third-party content that it uses in its assessment materials. OCR has attempted to identify and contact all copyright holders whose work is used in this paper. To avoid the issue of disclosure of answer-related information to candidates, all copyright acknowledgements are reproduced in the OCR Copyright Acknowledgements Booklet. This is produced for each series of examinations and is freely available to download from our public website (www.ocr.org.uk) after the live examination series.

If OCR has unwittingly failed to correctly acknowledge or clear any third-party content in this assessment material, OCR will be happy to correct its mistake at the earliest possible opportunity.

For queries or further information please contact the Copyright Team, First Floor, 9 Hills Road, Cambridge CB2 1GE.

OCR is part of the Cambridge Assessment Group; Cambridge Assessment is the brand name of University of Cambridge Local Examinations Syndicate (UCLES), which is itself a department of the University of Cambridge.

The Periodic Table of the Elements

	1	2	3	4	5	6	7	0										
	7 Li lithium 3	9 Be beryllium 4	11 Na sodium 11	12 C carbon 6	13 Al aluminium 13	14 N nitrogen 7	15 O oxygen 8	16 F fluorine 9	18 Ne neon 10									
	19 K potassium 19	20 Ca calcium 20	21 Sc scandium 21	22 Ti titanium 22	23 V vanadium 23	24 Cr chromium 24	25 Mn manganese 25	26 Fe iron 26	27 Co cobalt 27	28 Ni nickel 28	29 Cu copper 29	30 Zn zinc 30	31 Ga gallium 31	32 Ge germanium 32	33 As arsenic 33	34 Se selenium 34	35 Br bromine 35	36 Kr krypton 36
	37 Rb rubidium 37	38 Sr strontium 38	39 Y yttrium 39	40 Zr zirconium 40	41 Nb niobium 41	42 Mo molybdenum 42	43 Tc technetium [98]	44 Ru ruthenium 44	45 Rh rhodium 45	46 Pd palladium 46	47 Ag silver 47	48 Cd cadmium 48	49 In indium 49	50 Sn tin 50	51 Sb antimony 51	52 Te tellurium 52	53 I iodine 53	54 Xe xenon 54
	55 Cs caesium 55	56 Ba barium 56	57 La* lanthanum 57	72 Hf hafnium 72	73 Ta tantalum 73	74 W tungsten 74	75 Re rhenium 75	76 Os osmium 76	77 Ir iridium 77	78 Pt platinum 78	79 Au gold 79	80 Hg mercury 80	81 Tl thallium 81	82 Pb lead 82	83 Bi bismuth 83	84 Po polonium 84	85 At astatine 85	86 Rn radon 86
	[223] Fr francium 87	[226] Ra radium 88	[227] Ac* actinium 89	[261] Rf rutherfordium 104	[262] Db dubnium 105	[266] Sg seaborgium 106	[264] Bh bohrium 107	[277] Hs hassium 108	[268] Mt meitnerium 109	[271] Ds darmstadtium 110	[272] Rg roentgenium 111	Elements with atomic numbers 112-116 have been reported but not fully authenticated						

1	H
hydrogen	1

relative atomic mass
atomic symbol
name
atomic (proton) number

* The lanthanoids (atomic numbers 58-71) and the actinoids (atomic numbers 90-103) have been omitted.

The relative atomic masses of copper and chlorine have not been rounded to the nearest whole number.